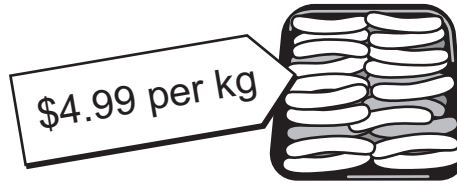


YEAR 3 NUMERACY – SET 8

Name Date

Anna bought 3 kg of sausages for a barbecue.

1



About how much did she pay?

\$3.00

\$5.00

\$8.00

\$15.00

2

Kim needs $\frac{1}{2}$ a cup of milk to make a banana smoothie for 1 person.

How much milk will he need to make banana smoothies for 6 people?

$1\frac{1}{2}$ cups

3 cups

6 cups

$6\frac{1}{2}$ cups

3

There are 53 children in John's school.

He wants to buy a Cherry-top iceblock for each child.



What is the smallest number of boxes of ice blocks John needs to buy?

4

How much water will be in this bucket when it is full?



10 centimetres

10 metres

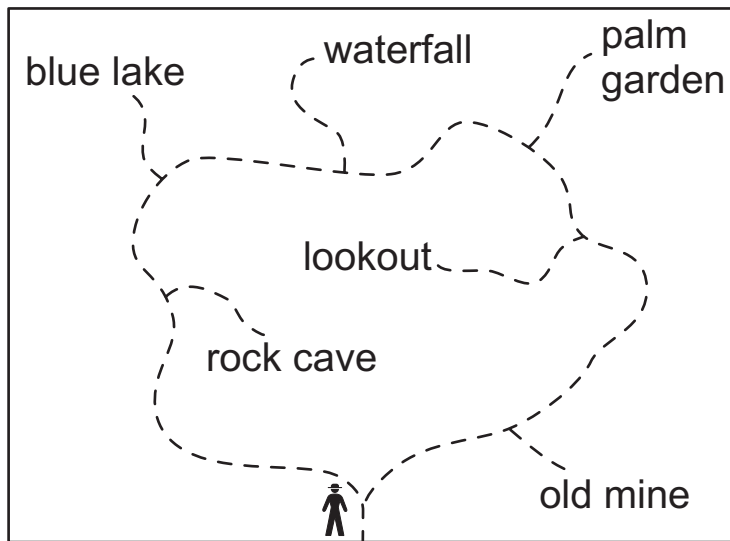
10 grams

10 litres

YEAR 3 NUMERACY – SET 8

Tim is walking clockwise around this track.

5



Which directions should he follow to get to the waterfall?

- Take the second track on the right
- Take the third track on the right.
- Take the second track on the left.
- Take the third track on the left.

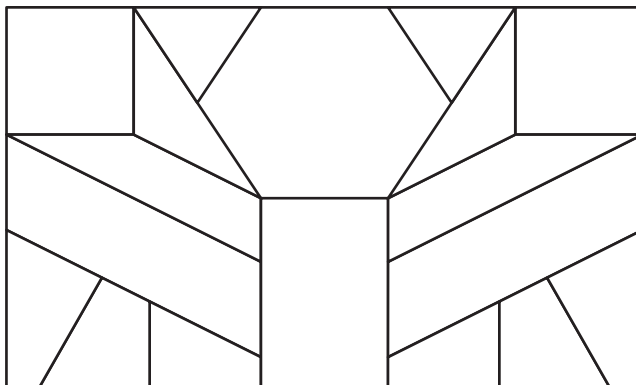
6

The book that Ann is reading has 63 pages.
Riley's book has 28 more pages than Ann's book.
How many pages are there in Riley's book?

pages

7

How many pieces of this puzzle are triangles?



2

4

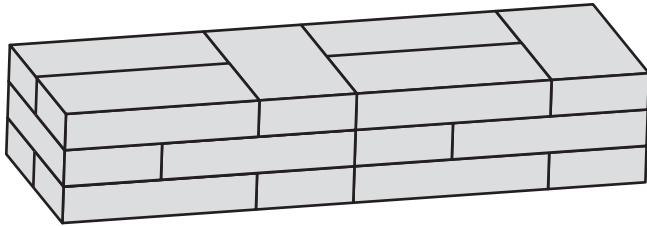
6

8

YEAR 3 NUMERACY – SET 8

Each of the pavers in this stack is the same size.

8



How many pavers are there altogether?

pavers