

# Year 3 – Set 3

Name ..... Date .....

**1**

Write the next number in this pattern.

730, 720, 710, 700,

**2**

Jen had \$10.  
She spent \$4.50.

How much money does she have left?

\$4.50

\$5.00

\$5.50

\$6.50

**3**

42 socks were hung on the line to dry.


How many pairs of socks would this make?

20

21

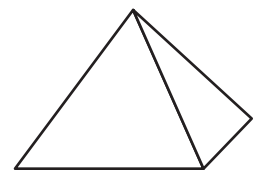
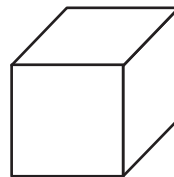
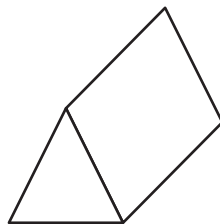

44

84



**4**

Which one of these shapes is a pyramid?



5

Some children were asked what sport they liked.

	Favourite sport			
	Tennis	Swimming	Soccer	Cricket
Boys	5	8	9	11
Girls	2	10	12	5

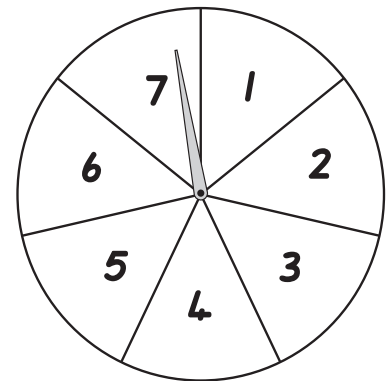
How many boys liked soccer the best?

6


Tom spins this spinner.

Which number has **no chance** of being landed on?

- 2                       4                       6                       8



7

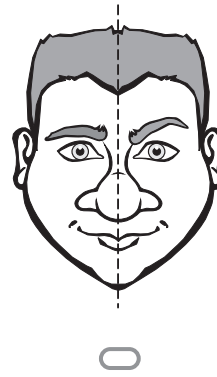
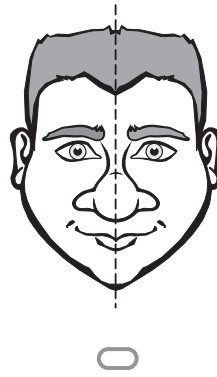
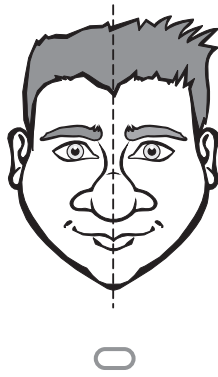
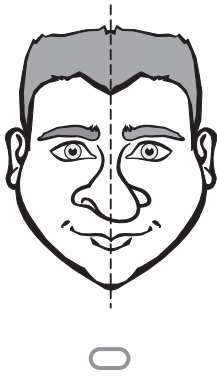


This cat is

- lighter than one kilogram.
- heavier than one kilogram.
- heavier than two kilograms.
- the same mass as two kilograms.

8

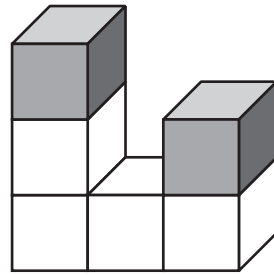
Which face is the same on both sides of the dotted line?



9

Lee glued 4 white cubes and 2 black cubes together to make this object.

She moved her object.



Which one of these is Lee's object?

