

External assessment 2023

Multiple choice question book

Engineering

General instruction

- Work in this book will not be marked.



Queensland
Government

QCAA

Queensland Curriculum
& Assessment Authority

THIS PAGE WILL NOT BE MARKED

Section 1

Instruction

- Respond to these questions in the question and response book.
-

QUESTION 1

A plastic beaker used to hold liquids in a laboratory is commonly manufactured using

- (A) polyethylene.
- (B) polypropylene.
- (C) polylactic acid.
- (D) polyvinyl chloride.

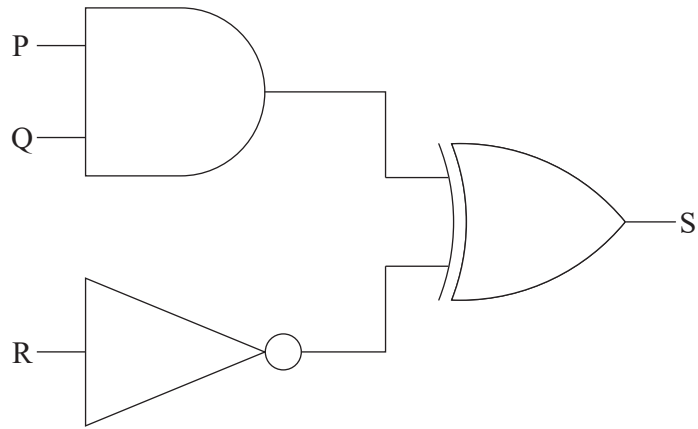
QUESTION 2

The force required to just stop an 80 kg box from sliding down a 20° incline is

- (A) 97 N
- (B) 250 N
- (C) 265 N
- (D) 282 N

QUESTION 3

A logic circuit is shown.



Which truth table corresponds to the logic circuit?

(A)

P	Q	R	S
1	0	1	0
1	1	0	0
1	1	1	1

(B)

P	Q	R	S
1	0	1	1
1	1	0	1
1	1	1	0

(C)

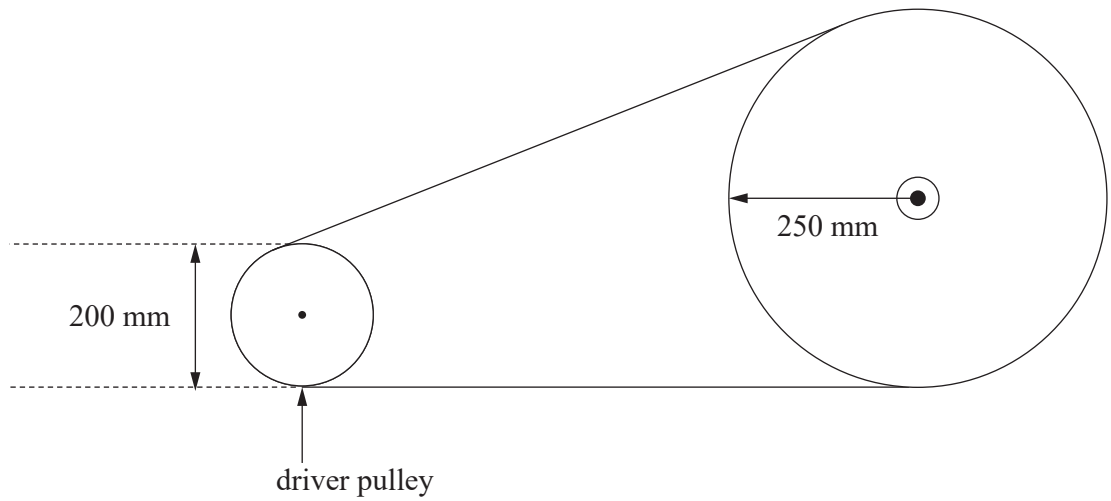
P	Q	R	S
1	0	1	0
1	1	0	1
1	1	1	0

(D)

P	Q	R	S
1	0	1	1
1	1	0	0
1	1	1	1

QUESTION 4

A simple pulley and belt driving system is shown.



The velocity ratio of the system is

- (A) 0.40
- (B) 0.80
- (C) 1.25
- (D) 2.50

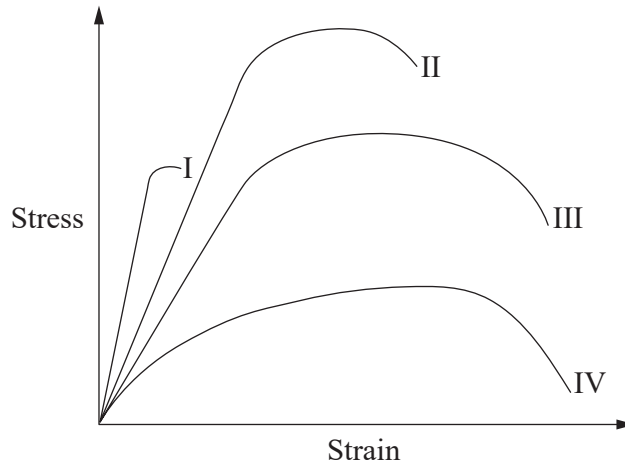
QUESTION 5

A conveyor belt moves 1 tonne of material with an effort of 3.5 kN. What is the efficiency of the conveyor when the velocity ratio is 4?

- (A) 29%
- (B) 70%
- (C) 80%
- (D) 88%

QUESTION 6

The graph shows the stress–strain curves of four different materials.



Which material can best withstand deformation within its proportional limit?

- (A) I
- (B) II
- (C) III
- (D) IV

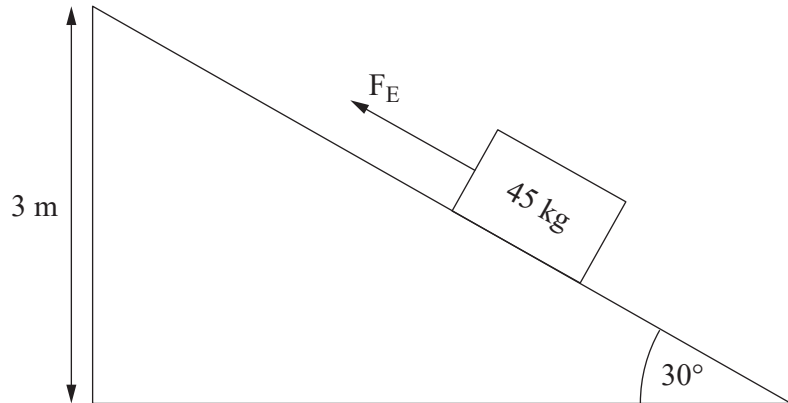
QUESTION 7

A 15 kg steel beam is dropped from a height of 4 m. The velocity of the steel beam just before it hits the ground is

- (A) 2.83 m/s
- (B) 6.26 m/s
- (C) 7.75 m/s
- (D) 8.85 m/s

QUESTION 8

A 45 kg box is pulled up an incline as shown.



Not to scale

If the system is 80% efficient and the velocity ratio is 2, what force is required to move the box?

- (A) 84 N
- (B) 221 N
- (C) 276 N
- (D) 441 N

QUESTION 9

Steel containing 0.11% carbon is

- (A) low carbon steel.
- (B) mild carbon steel.
- (C) medium carbon steel.
- (D) high carbon steel.

THIS PAGE WILL NOT BE MARKED

QUESTION 10

A 40 kg object is pushed 3 m up a 25° incline at a uniform velocity.

If the frictional force opposing motion is 163 N and the weight force component acting down the incline is 165.66 N, the work done is

- (A) 489 J
- (B) 497 J
- (C) 986 J
- (D) 1066 J

