

LUI

--	--	--	--	--	--	--	--	--	--

School code

--	--	--	--

School name

--

Given name/s

--

Family name

--

Attach your
barcode ID label here

Book

--

of

--

books used

External assessment 2025

Question and response book

Geography

Time allowed

- Planning time — 15 minutes
- Working time — 120 minutes

General instructions

- Answer all questions in this question and response book.
- Write using black or blue pen.
- QCAA-approved calculator permitted.
- Planning paper will not be marked.

Section 1 (30 marks)

- 5 short response questions

Section 2 (12 marks)

- 1 extended response question





DO NOT WRITE ON THIS PAGE

THIS PAGE WILL NOT BE MARKED



Section 1

Instructions

- If you need more space for a response, use the additional pages at the back of this book.
 - On the additional pages, write the question number you are responding to.
 - Cancel any incorrect response by ruling a single diagonal line through your work.
 - Write the page number of your alternative/additional response, i.e. See page ...
 - If you do not do this, your original response will be marked.
 - This section has five questions and is worth 30 marks.
-

DO NOT WRITE ON THIS PAGE
THIS PAGE WILL NOT BE MARKED

Do not write outside this box.

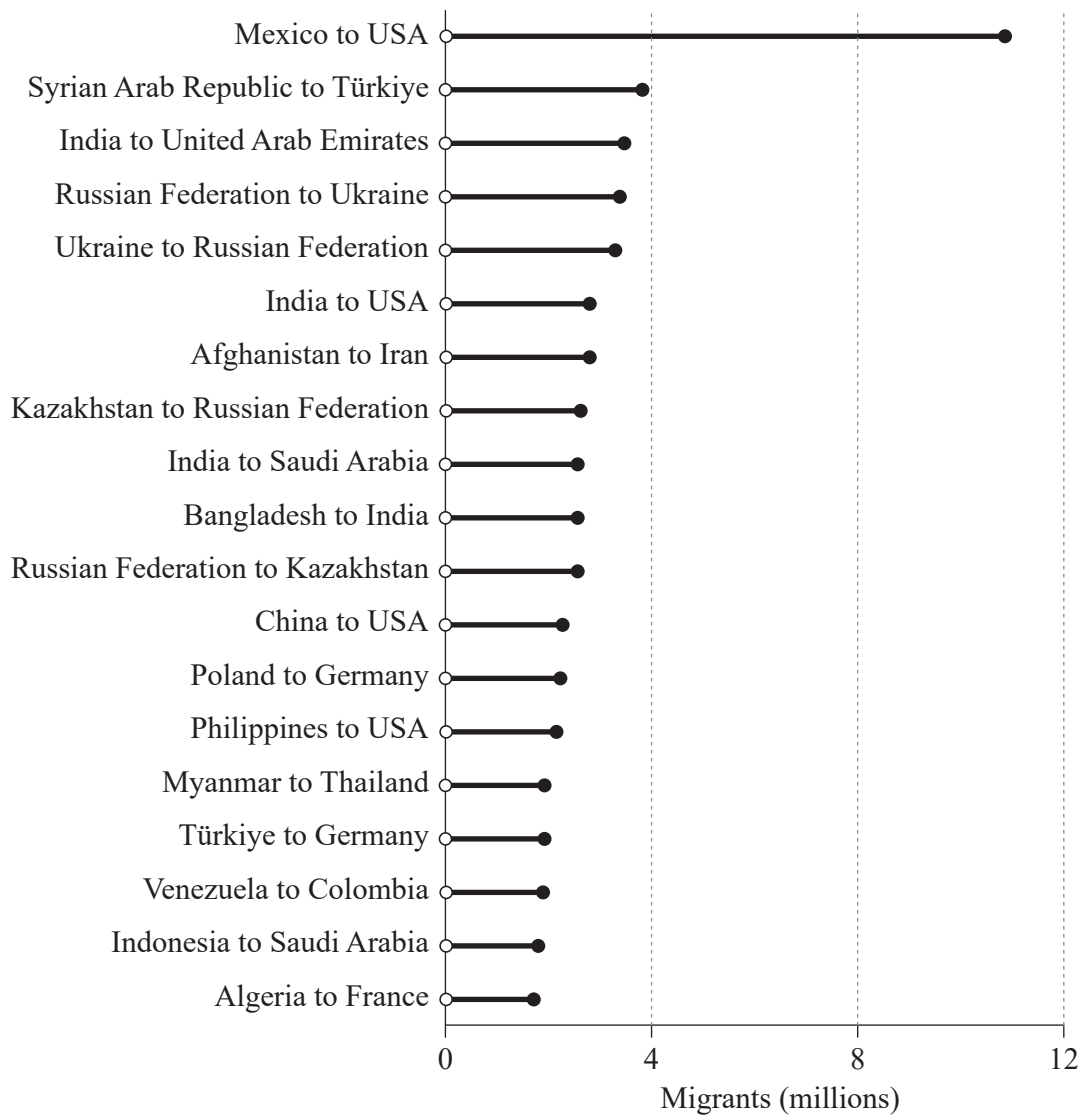


A large rectangular frame containing four horizontal lines, intended for writing or drawing.

Do not write outside this box.



Selected country-to-country migration corridors, 2020



Do not write outside this box.

Distribution of population by age, 1990 to 2050 (projected)

This content has been redacted for copyright purposes.

Redacted image can be viewed online:

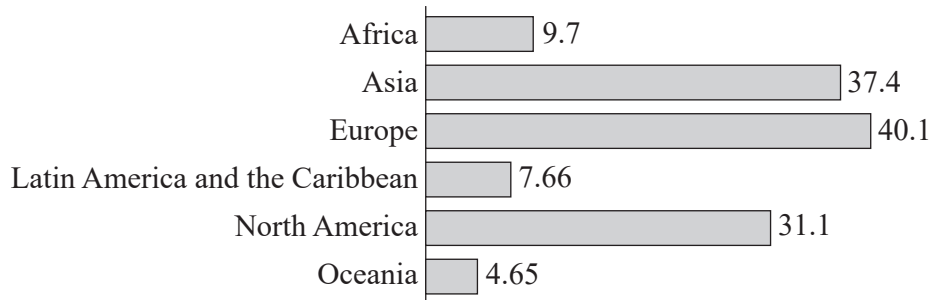
The redacted material is a modified version (key added with age categories defined and layout changed) of New York Times' Learning Network graph showing age distribution of the world's population, <https://www.nytimes.com/2023/09/14/learning/whats-going-on-in-this-graph-sept-20-2023.html>

Do not write outside this box.

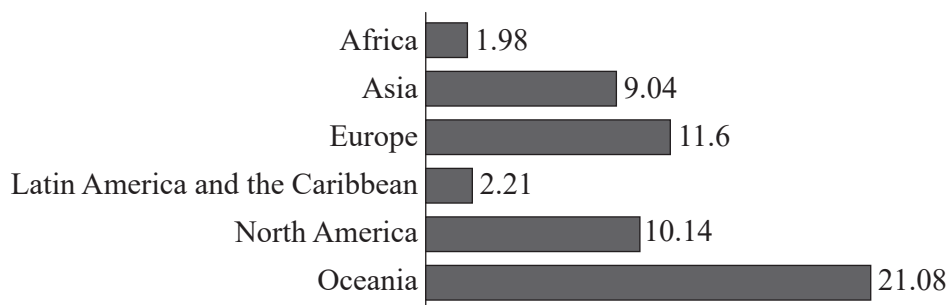
QUESTION 4 (7 marks)

Analyse the graphs to explain the three relationships between number of international migrants and percentage of international migrant population, using an example of each relationship. For one region, identify a geographical challenge arising from the evident relationship.

Number of international migrants (millions), 1990–2020



Percentage (%) of population who are international migrants, 2020



Do not write outside this box.


QUESTION 5 (9 marks)

a) Construct a graph using the data from the table.

[4 marks]

Population growth rate for Asia's most populous countries, 2018–2022

Country	Annual percentage growth rate				
	2018	2019	2020	2021	2022
India	1.1	1.0	1.0	0.8	0.7
China	0.5	0.4	0.2	0.1	0
Indonesia	1.0	0.9	0.8	0.7	0.6
Pakistan	1.5	1.6	1.7	1.8	1.9
Bangladesh	1.2	1.1	1.1	1.1	1.1



Note: If you make a mistake, cancel it by ruling a single diagonal line through your work and use the additional response space at the back of this book.

Do not write outside this box.



A large rectangular box containing 25 horizontal lines, intended for writing.

Do not write outside this box.





A large rectangular area containing 25 horizontal lines, intended for writing.

Do not write outside this box.



ADDITIONAL PAGE FOR STUDENT RESPONSES

Write the question number you are responding to.

Do not write outside this box.

References

Question 1

Data source: 'Median age vs. births per woman.' (2026). Our World in Data. <https://ourworldindata.org/grapher/median-age-vs-births-per-woman?country=FRA~ITA~EGY~LBY~MLI~NER~RWA~SOM~ZMB~ISL~DEU~BDI~GHA~UKR> Licensed Creative Commons Attribution 4.0 (CC BY 4.0)

Question 2

Data source: Figure 3 in Chapter 2 of 'World Migration Report 2022', International Organization for Migration (IOM) <https://worldmigrationreport.iom.int/world-migration-report-2022-selected-infographics>

Question 3

The redacted material is a modified version (key added with age categories defined and layout changed) of *New York Times' Learning Network* graph showing age distribution of the world's population, <https://www.nytimes.com/2023/09/14/learning/whats-going-on-in-this-graph-sept-20-2023.html>

Question 4

Data source: World Migration Report 2022 interactive, International Organization for Migration (IOM). <https://worldmigrationreport.iom.int/wmr-2022-interactive> Current interactive version at <https://worldmigrationreport.iom.int/msite/wmr-2024-interactive>

Question 5

Population growth (annual %) 2022, World Bank Open Data. <https://data.worldbank.org/indicator/SP.POP.GROW>

Creative Commons Attribution 4.0 International (CC BY 4.0)

Data and information provided in this paper may have been developed or adjusted for exam purposes and should not be taken as factual.



© State of Queensland (QCAA) 2025

Licence: <https://creativecommons.org/licenses/by/4.0> | Copyright notice: www.qcaa.qld.edu.au/copyright — lists the full terms and conditions, which specify certain exceptions to the licence. Third-party materials referenced above are excluded from this licence. | Attribution: © State of Queensland (QCAA) 2025