

# YEAR 3 NUMERACY – SET 9

Name ..... Date .....

## 1 March

M	T	W	T	F	S	S
	1	2	3	4	5	6
7	8	9	10	11	12	13
14	15	16	17	18	19	20
21	22	23	24	25	26	27
28	29	30	31			

Dan's mum works three days a week.

She works Tuesday, Wednesday, Saturday.

How many days does she work in March?

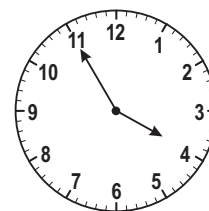
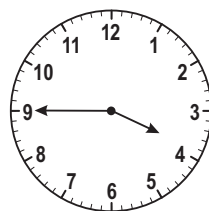
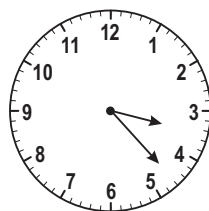
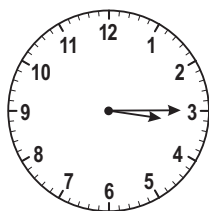
3

14

15

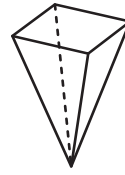

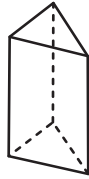
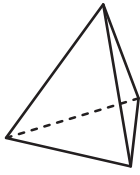
31

## 2 What is the time on this clock?



## YEAR 3 NUMERACY – SET 9

3 Which one of these shapes is a square pyramid?



4 Jim scored 14 goals in a game.  
Jack scored 7 more goals than Jim.  
How many goals did Jack score?

5



This is the change Gus got when he bought a drink.

He paid with



What was the cost of the drink?

\$3.35



\$1.35



\$2.35



\$5.00



## YEAR 3 NUMERACY – SET 9

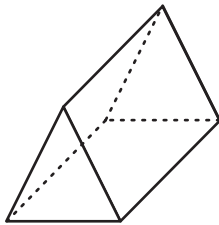
- 6 The students in Mike’s class do maths activities on Friday.

Each activity takes 10 minutes.

The class spends 50 minutes on activities.

How many activities are there?

- 7 How many edges does this shape have?



3

6

9

12

- 8 Tennis balls are packed into tubes.

Each tube holds 3 balls.

A school needs 17 tennis balls.

What is the **least** number of tubes the school needs?



5

6

14

20