
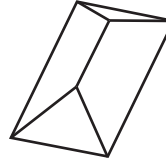

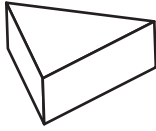


YEAR 3 NUMERACY – SET 7

Name Date

Which of these objects has the **most** edges?

1



Sally has 1 yellow pencil, 5 red pencils, 2 green pencils and 3 blue pencils in her pencil case.

She takes one pencil without looking.

2

The colour of the pencil she is **most likely** to take is



red.



blue.



green.



yellow.

The winner of a bike race finished the race in 1 hour 25 minutes.

How long was this in minutes?

3



75 minutes



85 minutes



90 minutes



125 minutes

There are 22 students in a class.

Half of them have a pet dog.

4

How many students have a pet dog?

students

YEAR 3 NUMERACY – SET 7

Three children kept a record of the number of books they read during the holidays.

5

Name	Books read
Max	
Jill	
Alex	

How many books did they read altogether?

books

What is the time 15 minutes before



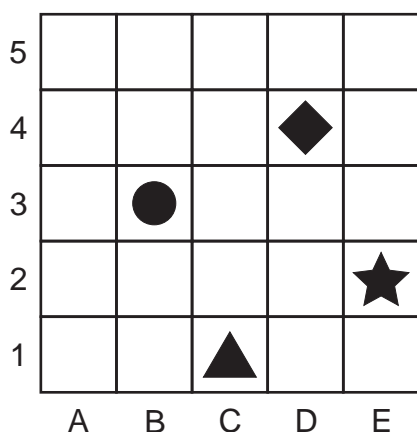
6



7

\$6 was shared equally among 10 boys.
How much did each boy get?

8



Jo put her ◆ on the game board at D4.

Where did Zac put his ● ?