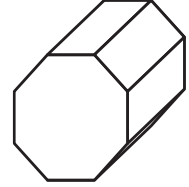
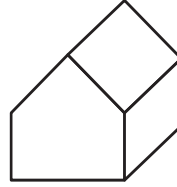
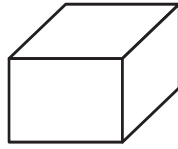
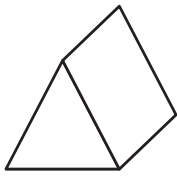


YEAR 3 NUMERACY – SET 6

Name Date

1




All these shapes are

- cubes
- prisms
- spheres
- pyramids

2

Tim is making a pattern across the top of a card.



What is the next shape in his pattern?



3

14 + 26 has the same value as 15 +

YEAR 3 NUMERACY – SET 6

71, 64, 58, 53,

4

What is the next number in this counting pattern?

46

47

49

50

Jim has eight 5 cent pieces.

How many 10 cent pieces does Andy need to have the same amount of money as Jim?

5

10

8

5

4

Write the number that has three hundreds, eight tens and zero ones.


6

7

$67 - 39 =$

Sally took this tin of coloured pencils to school.

8



She left 9 pencils on her desk and took the rest home.

How many pencils did she take home?