

Year 3 – Set 5

Name Date

1

Which number is 100 bigger than 11?

10011

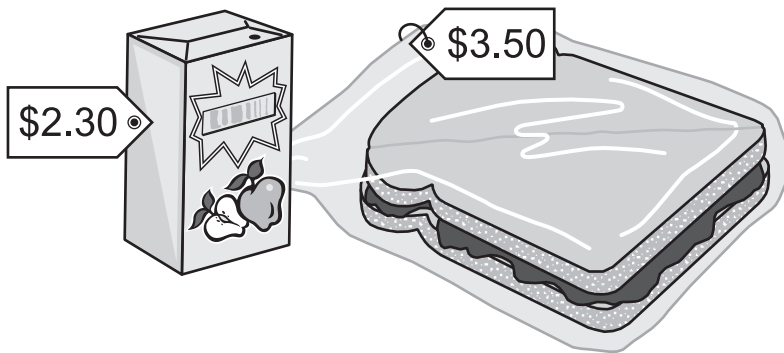
1011

111

101

2

Tim bought a juice and a sandwich.
This picture shows how much they each cost.



What is the correct change from \$10.00?

\$5.80

\$5.20

\$4.80

\$4.20

3

The difference between 56 and 72 is

16.

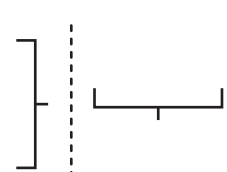
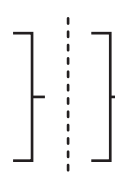
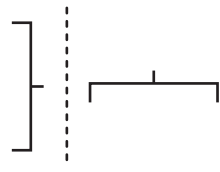
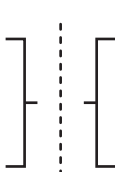
24.

26.

128.

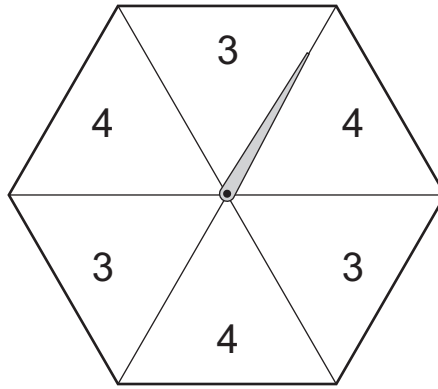
4

Which one of these shapes has been **flipped** over the dotted line?



5

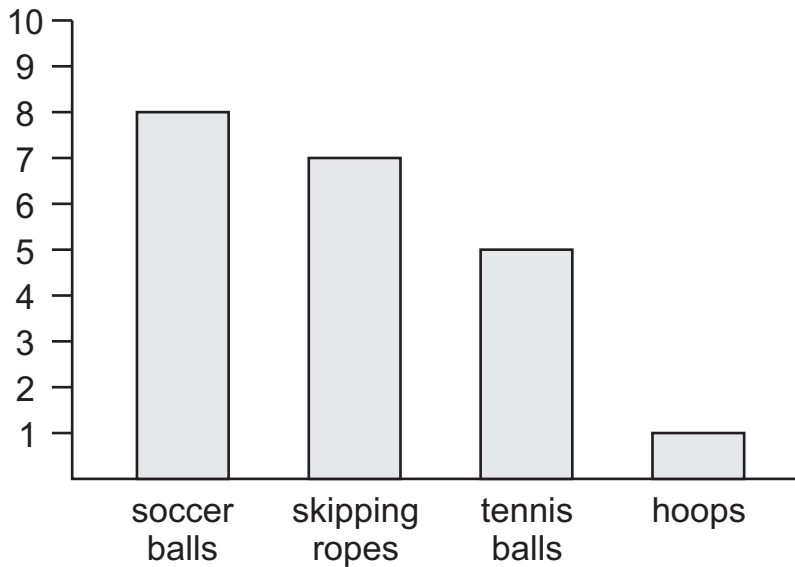
Using this spinner



- there is an **equal chance** of getting a 3 or getting a 4.
- getting a 3 is **more likely** than getting a 4.
- getting a 3 is **less likely** than getting a 4.
- you **always** get a 4 after you get a 3.

6

This is a graph of the sports equipment used at lunch time.



Which one of these statements is true?

- More than 8 soccer balls were used.
- Skipping ropes were used the most.
- 5 tennis balls were used.
- Hoops were not used.


7

Which clock shows a quarter past 2?



8

Robert made this model of a castle.



How many cones did he use?

4



5



8



9



9

Here is a number pattern.

11, 22, 44, 88, 176

What is the correct rule for the pattern?



Add 2 each time.



Double each time.



Add 11 each time.



Double and add 10 each time.