

Year 3 – Set 4

Name Date

1

What is the next number in this pattern?

170, 150, 130, 110,

2

Lilly has \$3.45.

She needs \$5 to buy a pencil case.

How much **more** money does she need?

\$1.55

\$1.65

\$2.55

\$2.65

3

This table shows the lunches eaten by some students.

Students	Sandwiches	Fruit	Juice	Muffin	Water
Sarah	✓		✓	✓	
Noah	✓			✓	✓
Henry		✓		✓	✓
Lizzie	✓	✓	✓		

How many students had fruit or fruit juice for lunch?

1

2

3

4

4

Which number is 14 less than 33?

19

21

29

47

5

Ky's foot is 20 centimetres long.
He uses his foot to measure his desk.
His desk measures 4 of his feet long.

How long is his desk?

20 centimetres

24 centimetres

40 centimetres

80 centimetres

6

Sam and Emma have a packet of jelly beans each.

They sort their jelly beans into colours and write it on a table.


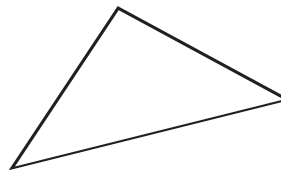

<i>Sam</i>	
<i>Colour</i>	<i>Number</i>
<i>Black</i>	###
<i>Red</i>	
<i>Green</i>	
<i>White</i>	

<i>Emma</i>	
<i>Colour</i>	<i>Number</i>
<i>Black</i>	
<i>Red</i>	###
<i>Green</i>	
<i>White</i>	

How many **more** black jelly beans has Sam than Emma?

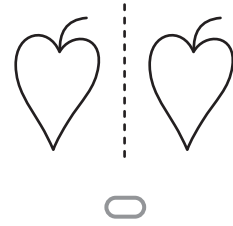
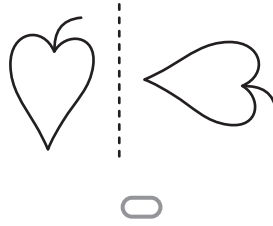
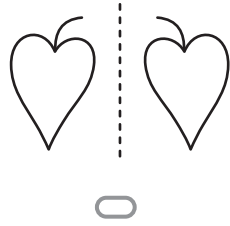
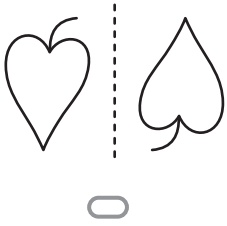
7

Which shape is a triangle?



8

Which of these has been **slid** from one side of the dotted line to the other side?



9

This is a TV guide (timetable).

Channel 5 – Tuesday	
Time	Show
8:00	Pinga
8:15	Arno's World
8:30	News
8:45	Captain Kangaroo
9:00	Playtime

What time does Captain Kangaroo start?

