

Year 3 – Set 1

Name Date

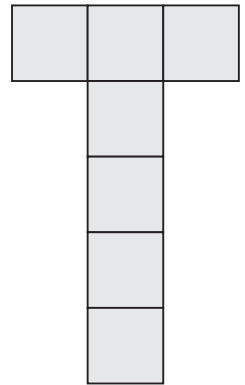
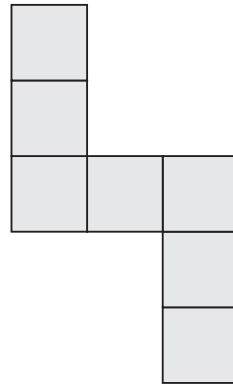
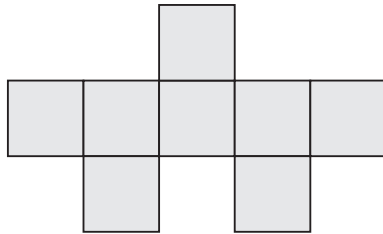
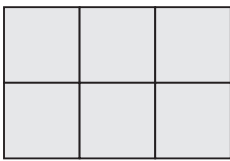
1

Which number is 10 more than 494?

- Four hundred and four
- Four hundred and fourteen
- Five hundred and four
- Five hundred and fourteen

2

Which shape below has the largest area?



3

This bag costs 95 cents.

Anna has 40 cents.

How much **more** money does she need to buy this bag?

cents



4


Sarah made 18 cup cakes.

She shared them equally on 6 plates.

How many cakes were on each plate?

5

Number of Australian animals at the zoo.

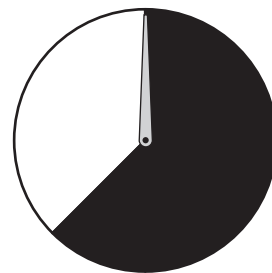
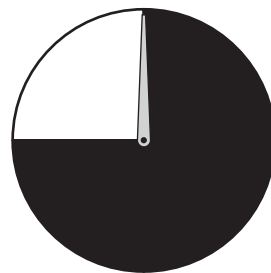
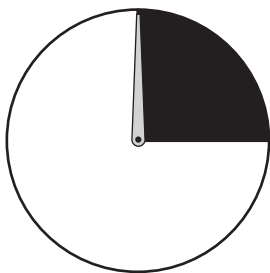
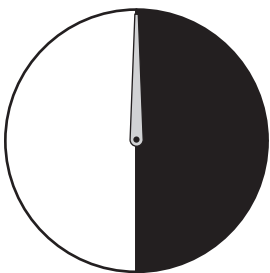


Which sentence is true?

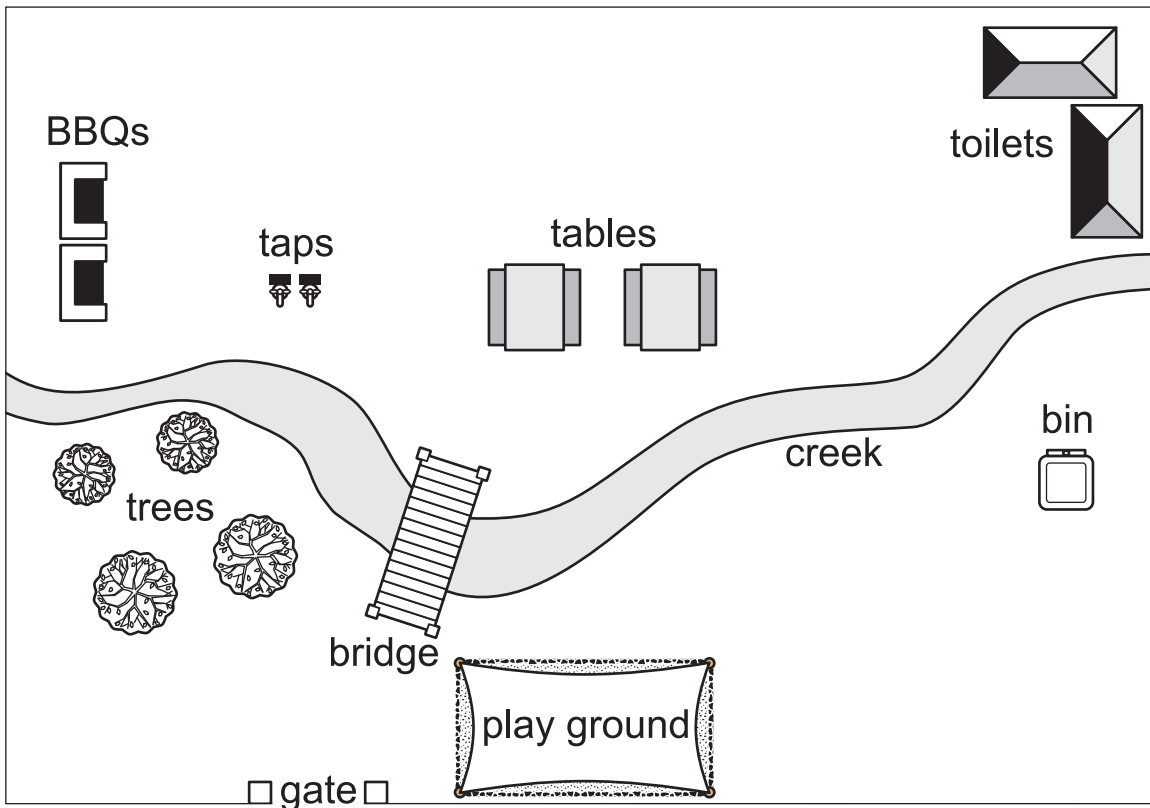
- There are 3 more wombats than koalas.
- There are 3 more emus than kangaroos.
- There are 3 fewer emus than wombats.
- There are 3 fewer kangaroos than koalas.

6

Which spinner gives you the best chance of landing on black?



7



The creek is between the

- bin and playground.
- toilets and tables.
- taps and BBQs.
- tables and bin.

8

Jane made 5 pies.


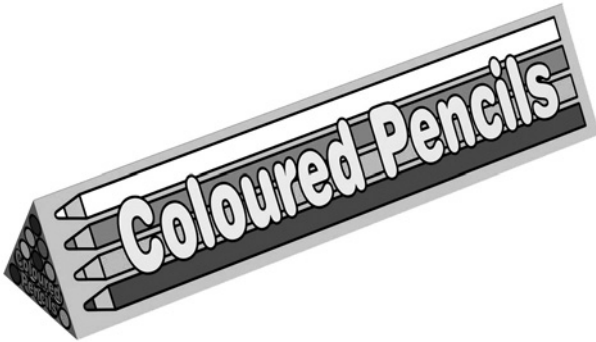

She wanted to share them equally among 4 friends.

How much pie would each friend get?

- $\frac{1}{2}$
- $\frac{3}{4}$
- $1\frac{1}{4}$
- $1\frac{1}{2}$

9

Which one of these shapes has 12 edges?



10

Mark put some stamps on this grid.

4			▲	
3	●			
2				■
1		★		
	A	B	C	D

This stamp ★ is at

D2

C4

B1

A3